


Identify attributes of the following shapes.

Problem 1

Circle the shape that does not belong in the group.

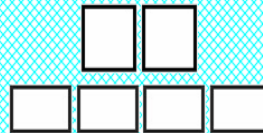


Bob is holding an object. It has one square face and 4 faces that are triangles. What shape is the object that Bob is holding?

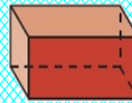
Identify attributes of the following shapes.

Problem 2

Choose the shape made by the faces.



a.



b.



c.



d.



Kara is opening a birthday present. It is a shape with no faces and no vertices. What shape is the present?

Identify attributes of the following shapes.

Problem 3

I am a three-dimensional shape. I have a circle at the bottom. I have a circle at the top. What shape am I?

Nathan dribbles a soccer ball around the orange object shown here. What shape is the object?



Identify attributes of the following shapes.

Problem 4

Jordan is looking for a shape with a square as a face. Circle the object that has a square as a face.



For his science project, Oliver makes a display. The display has more sides than a pentagon. It has less than 7 sides. What shape is the display Oliver makes? Draw it.
