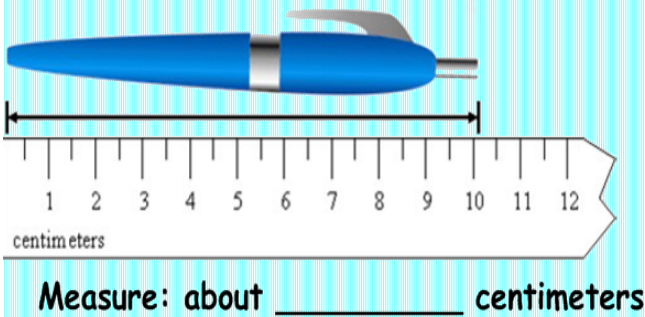
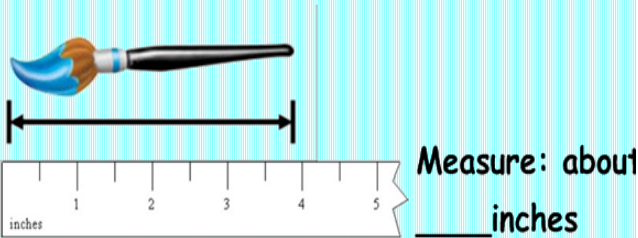


2MD5 Worksheet video 1 Name _____

Measure to the nearest centimeter or inch. Problem 1



Measure to the nearest centimeter or inch. Problem 2

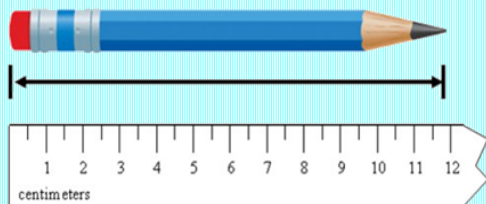
Ally estimated that her binder was 16 inches long. She measured her binder and found that it was 14 inches long. What is the difference between the estimated length and the measured length of her binder?
_____ inches

Tim wants to measure the length of a stove.



Will he need more yards or feet to measure the length?

Measure to the nearest centimeter or inch. Problem 3




Measure: about _____ centimeters

Tom measured his book bag. It was 40 centimeters long. Then he measured his pen. His pen is 10 centimeters long. How many pens long is his book bag?

_____ pens

Measure to the nearest centimeter or inch. Problem 4

Estimate. Then use a centimeter ruler to measure.



Estimate: about _____ centimeters

Measure: about _____ centimeters

Lewis builds a model car. It is more than 20 inches long. It is less than 23 inches long. It is an even length. How long is the model car?
